


Good luck!

Part A: Endgame Theory


1. Evaluate the following position (white's move).



With best play, will the game end in:

- a) A white victory
- b) A draw


2. Evaluate the following position (white's move).



With best play, will the game end in:

- a) A white victory
- b) A draw

3. What is white's best move in the following position? Mark your answer with an arrow or with chess notation for extra credit.



4. Which pawn endgame method did white use in the last example?
 5. Name the three pawn endgame methods studied in class.

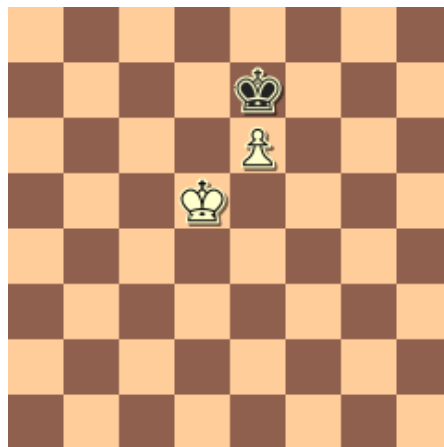
1: _____

2: _____


3: _____

6. What is black's only drawing move in the following position (black's turn)?

Mark the move with an arrow or use chess notation for extra credit.



7. What is white's only winning move in the following position? Mark the move with an arrow or use chess notation for extra credit.



This is the end of Part A. Please raise your hand and submit your test.