

Midterm 1

UCLA: Math 31B, Spring 2017

Instructor: Noah White

Date: 24 April 2017

Version: b

- This exam has 4 questions, for a total of 40 points.
- Please print your working and answers neatly.
- Write your solutions in the space provided showing working.
- All final answers should be exact values. Decimal approximations will not be given credit.
- Indicate your final answer clearly.
- Full points will only be awarded for solutions with correct working.
- You may write on the reverse of a page or on the blank pages found at the back of the booklet however these will not be graded unless very clearly indicated.
- Non programmable and non graphing calculators are allowed.

Name: Solutions

ID number: _____

Discussion section (please circle):

Day/TA	Jeanine	William	Yuejiao
Tuesday	1A	1C	1E
Thursday	1B	1D	1F

Question	Points	Score
1	10	
2	10	
3	10	
4	10	
Total:	40	

Some formulas you might find useful.

Ordinary trig functions

$$\frac{d}{dx} \sin x = \cos x$$

$$\frac{d}{dx} \cos x = -\sin x$$

$$\frac{d}{dx} \tan x = \sec^2 x$$

$$\frac{d}{dx} \sec x = \sec x \tan x$$

$$\frac{d}{dx} \csc x = -\csc x \cot x$$

$$\frac{d}{dx} \cot x = -\csc^2 x$$

Hyperbolic trig functions

$$\frac{d}{dx} \sinh x = \cosh x$$

$$\frac{d}{dx} \cosh x = \sinh x$$

$$\frac{d}{dx} \tanh x = \operatorname{sech}^2 x$$

$$\frac{d}{dx} \operatorname{sech} x = -\operatorname{sech} x \tanh x$$

$$\frac{d}{dx} \operatorname{csch} x = -\operatorname{csch} x \coth x$$

$$\frac{d}{dx} \coth x = -\operatorname{csch}^2 x$$

Inverse trig functions

$$\frac{d}{dx} \sin^{-1} x = \frac{1}{\sqrt{1-x^2}}$$

$$\frac{d}{dx} \cos^{-1} x = -\frac{1}{\sqrt{1-x^2}}$$

$$\frac{d}{dx} \tan^{-1} x = \frac{1}{1+x^2}$$

$$\frac{d}{dx} \sec^{-1} x = \frac{1}{|x|\sqrt{x^2-1}}$$

$$\frac{d}{dx} \csc^{-1} x = -\frac{1}{|x|\sqrt{x^2-1}}$$

$$\frac{d}{dx} \cot^{-1} x = -\frac{1}{1+x^2}$$

Inverse hyperbolic trig functions

$$\frac{d}{dx} \sinh^{-1} x = \frac{1}{\sqrt{1+x^2}}$$

$$\frac{d}{dx} \cosh^{-1} x = \frac{1}{\sqrt{x^2-1}}$$

$$\frac{d}{dx} \tanh^{-1} x = \frac{1}{1-x^2}$$

$$\frac{d}{dx} \operatorname{sech}^{-1} x = \frac{1}{x\sqrt{1-x^2}}$$

$$\frac{d}{dx} \operatorname{csch}^{-1} x = -\frac{1}{|x|\sqrt{1+x^2}}$$

$$\frac{d}{dx} \coth^{-1} x = \frac{1}{1-x^2}$$

1. (a) (4 points) Calculate

$$\int_e^a \frac{1}{3x \ln x} dx$$

where $a = e^{e^3}$.

- (b) (6 points) Calculate

$$\int_0^{\ln \sqrt{3}} \frac{e^x}{e^{2x} + 1} dx$$

a) $u = \ln x \quad du = \frac{dx}{x}, \quad u(e) = 1, \quad u(e^{e^3}) = e^3$

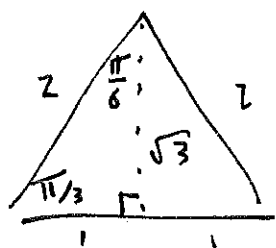
$$\int_e^a \frac{1}{3x \ln x} dx = \int_1^{e^3} \frac{1}{3u} du$$

$$= \frac{1}{3} \ln u \Big|_1^{e^3} = \frac{1}{3} (3 - 0) = 1$$

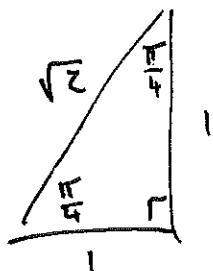
b) $u = e^x \quad du = e^x dx \quad u(0) = 1 \quad u(\ln \sqrt{3}) = \sqrt{3}$

$$\int_0^{\ln \sqrt{3}} \frac{e^x}{e^{2x} + 1} dx = \int_1^{\sqrt{3}} \frac{du}{u^2 + 1} = \tan^{-1} u \Big|_1^{\sqrt{3}} = \frac{\pi}{3} - \frac{\pi}{4}$$

$$= \frac{\pi}{12}$$



$$\tan \frac{\pi}{3} = \sqrt{3}$$



$$\tan \frac{\pi}{4} = 1$$

2. (a) (3 points) Let $f(x) = x^4 - x^3 + 4x^2 + 3x - 2$. What are the Taylor polynomials $T_2(x)$ and $T_4(x)$ of $f(x)$ centered at 0?
- (b) (2 points) Find the n^{th} Taylor polynomial about 0 of the function $\frac{1}{1+x}$.
- (c) (5 points) Let $T_n(x)$ be the n -th Taylor polynomial for $e^{\frac{1}{2}x}$ centered at 0. Find an n such that

$$|\sqrt{e} - T_n(1)| \leq \frac{1}{10^{112}}.$$

a) $T_2(x) = 4x^2 + 3x - 2$

$T_4(x) = f(x)$

b) $f^{(n)}(x) = (-1)^n \frac{n!}{(1+x)^{n+1}}$, $f^{(n)}(0) = (-1)^n n!$

$$T_n(x) = \sum_{k=0}^n \frac{f^{(k)}(0)}{k!} x^k = \sum_{k=0}^n (-1)^k x^k$$

$$= 1 - x + x^2 - \dots \pm x^n$$

c) $f(x) = e^{\frac{1}{2}x}$, $f^{(n)}(x) = \frac{e^{\frac{1}{2}x}}{2^n}$, We know that

$$|f^{(n+1)}(x)| \leq \frac{\sqrt{e}}{2^{n+1}} \text{ for all } 0 \leq x \leq 1 \text{ so by the}$$

error bound then:

$$|f(1) - T_n(1)| = |\sqrt{e} - T_n(1)| \leq \frac{\sqrt{e}}{2^{n+1}} \frac{1^{n+1}}{(n+1)!} = \frac{\sqrt{e}}{2^{n+1} (n+1)!}$$

In order to make sure that $\frac{\sqrt{e}}{2^{n+1} (n+1)!} \leq \frac{1}{10^{112}}$

we observe $\frac{\sqrt{e}}{2^{n+1} (n+1)!} = \frac{\sqrt{e}}{\underbrace{2 \cdot 4 \cdot 6 \cdots (2n+2)}_{n+1 \text{ factors}}} \leq \frac{1}{\underbrace{10 \cdot 12 \cdots (2n+2)}_{n-3 \text{ factors}}} \leq \frac{1}{10^{n-3}}$

so we should make sure that $n-3 \geq 112$

ie $n=115$ will do.

3. (a) (6 points) Suppose $a > 0$. Calculate the following definite integral using a u -substitution.

$$\int \frac{1}{a^2 - x^2} dx$$

- (b) (2 points) Give a formula for $\tan(\sin^{-1} x)$ which does not involve trigonometric functions.

- (c) (2 points) Give a formula for $\tanh(\sinh^{-1} x)$ which does not involve (hyperbolic) trigonometric functions.

a) Note that $\frac{1}{a^2 - x^2} = \frac{1}{a^2} \cdot \frac{1}{1 - (\frac{x}{a})^2}$

$u = \frac{x}{a}$, $du = \frac{dx}{a}$ so

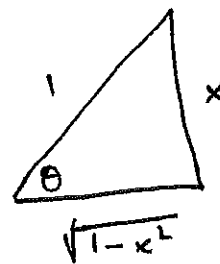
$$\int \frac{dx}{a^2 - x^2} = \int \frac{1}{a^2} \frac{dx}{1 - (\frac{x}{a})^2} = \frac{1}{a} \int \frac{du}{1 - u^2} = \frac{1}{a} \tanh^{-1} u + C$$

$$= \frac{1}{a} \tanh^{-1} \frac{x}{a} + C$$

b) let $\theta = \sin^{-1} x$, ie $x = \sin \theta$

so $\tan \theta = \tan(\sin^{-1} x)$

$$= \frac{x}{\sqrt{1 - x^2}}$$



c) let $\theta = \sinh^{-1} x$, so $x = \sinh \theta$

Now $\cosh^2 \theta - \sinh^2 \theta = 1$ so $\frac{1}{\tanh^2 \theta} - 1 = \frac{1}{\sinh^2 \theta}$

thus $(\tanh^2 \theta)^{-1} = \frac{1}{\sinh^2 \theta} + 1$

$$= \frac{1}{x^2} + 1 = \frac{1 + x^2}{x^2}$$

so $\tanh^2 \theta = \frac{x^2}{1 + x^2}$ and

$$\tanh(\sinh^{-1} x) = \tanh(\theta) = \frac{x}{\sqrt{1 + x^2}}$$

4. (10 points) Calculate the following indefinite integral

$$\int \frac{3e^{2x} - 10e^x + 5}{(e^x - 2)^2(e^x + 1)} dx.$$

First make the substitution $u = e^x$, $du = e^x dx$, $dx = \frac{du}{u}$

$$\int \frac{3u^2 - 10u + 5}{(u-2)^2(u+1)u} du, \text{ Now use partial fractions}$$

$$\frac{3u^2 - 10u + 5}{(u-2)^2(u+1)u} = \frac{A}{u-2} + \frac{B}{(u-2)^2} + \frac{C}{u+1} + \frac{D}{u}$$

$$3u^2 - 10u + 5 = A(u-2)(u+1)u + B(u+1)u + C(u-2)^2 + D(u-2)^2(u+1)$$

$$\underline{u=0}: 5 = 4D, D = 4/5 \quad \left| \quad \underline{u=2}: -3 = 6B\right.$$

$$\underline{u=-1}: 18 = -9C \quad C = -2 \quad \left| \quad B = -1/2.\right.$$

$$\underline{u=1}: -2 = -2A + 2B + C + 2D$$

$$= -2A - 1 - 2 + 8/5$$

$$= -2A - 3 + 8/5$$

$$-2A = 1 - 8/5 = -3/5$$

$$A = 3/10$$

$$\int \frac{3u^2 - 10u + 5}{(u-2)^2(u+1)u} du = \int \frac{3/10}{u-2} + \frac{1/2}{(u-2)^2} - \frac{2}{u+1} + \frac{4/5}{u} du$$

$$= \frac{3}{10} \ln|u-2| + \frac{1}{2(u-2)} - 2 \ln|u+1|$$

$$+ \frac{4}{5} \ln|u| + C.$$